



Name: _____



COUNT, CALCULATE AND COMPARE *3RD GRADE REVIEW*

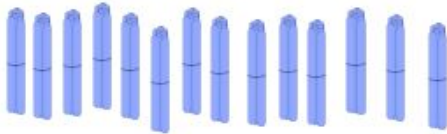
Week of October 1, 2018



Monday's Mastery of PLACE VALUE

Standard 2.NBT.A.1 Understand that the three-digit number represent amounts of hundreds, tens, and one.

These are bundles with 10 sticks in each.



- a. How many tens are there? _____
- b. How many hundreds? _____
- c. How many sticks in all? _____


Parent Initials: _____

Tuesday

Standard 2.OA.C.3 Determine whether a group of objects (up to 20) has an odd or even number of members, e.g., by pairing objects or counting them by 2s; write an equation to express an even number as a sum of two equal addends.

Draw an array for each set. Complete the sentences. The first array has been drawn for you.

a. 2 rows of 6



2 rows of 6 = _____

_____ + _____ = _____

6 doubled is _____.

b. 2 rows of 7

2 rows of 7 = _____

_____ + _____ = _____

7 doubled is _____.

Circle one or "a" and "b."

a. 6 doubled is even or odd

b. 7 doubled is even or odd

Parent Initials: _____



Name: _____




Wednesday

Standard 2.OA.C.3 Determine whether a group of objects (up to 20) has an odd or even number of members, e.g., by pairing objects or counting them by 2s; write an equation to express an even number as a sum of two equal addends.

Redraw the following sets of dots as columns of two or 2 equal rows.

1.



2.



There are _____ dots.

There are _____ dots.

Is _____ an even number? _____

Is _____ an even number? _____

Parent Initials: _____

Thursday *College Bound Challenge*

Standard 2.OA.C.3 Determine whether a group of objects (up to 20) has an odd or even number of members, e.g., by pairing objects or counting them by 2s; write an equation to express an even number as a sum of two equal addends.

Eggs come in cartons of 12. Kennedy's mom used 3 eggs. Use pictures, numbers, or words to explain whether the amount left is even or odd.



Parent Signature: _____



Name: _____

